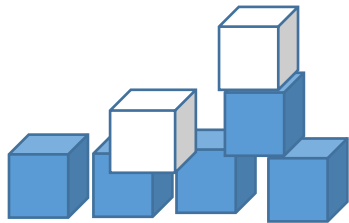
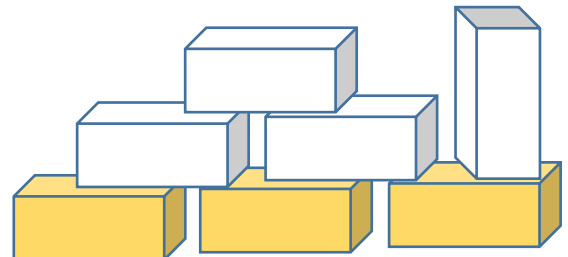


Színezz be annyi kockát, hogy 7 elemből álljon a vár!

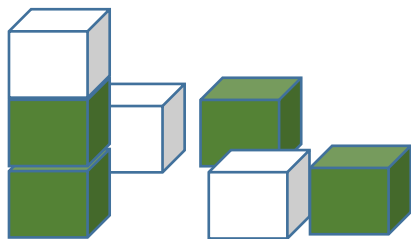
Írj számfeladatot a rajzról!



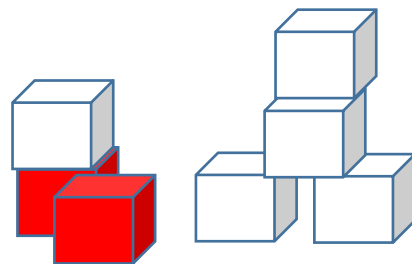
$$5 + 2 = 7$$



$$3 + \square = 7$$



$$4 + \square = 7$$



$$\square + \square = 7$$

Végezd el a következő műveleteket!

$$2 + 3 =$$

$$4 - 3 =$$

$$1 + 4 =$$

$$5 - 5 =$$

$$0 + 7 =$$

$$6 - 2 =$$

$$5 + 3 =$$

$$7 - 4 =$$

$$4 + 4 =$$

$$10 - 6 =$$